

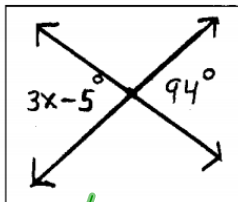
HELLO! PLEASE GET YOUR ISN!

THIS WILL GO ON THE TOP OF PAGE 14

Please pick up your graded angle practice sheet and glue it to
page 15 in your ISN!!!

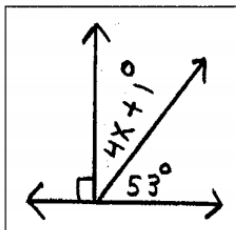
Find the value of x (questions 17 thru 19).

17.



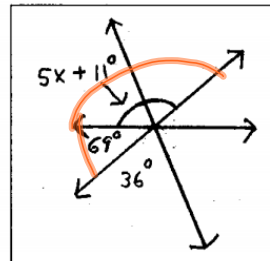
$$\begin{aligned} 3x-5 &= 94 \\ +5 &+5 \\ \hline 3x &= 99 \\ \div 3 &\div 3 \\ \hline x &= 33 \end{aligned}$$

18.



$$\begin{aligned} 4x+1+53 &= 90 \\ 4x+54 &= 90 \\ -54 &-54 \\ \hline 4x &= 36 \\ \div 4 &\div 4 \\ \hline x &= 9 \end{aligned}$$

19.



$$\begin{aligned} 5x+11+69 &= 180 \\ 5x+80 &= 180 \\ -80 &-80 \\ \hline 5x &= 100 \\ \div 5 &\div 5 \\ \hline x &= 20 \end{aligned}$$

Aug 17-8:55 AM